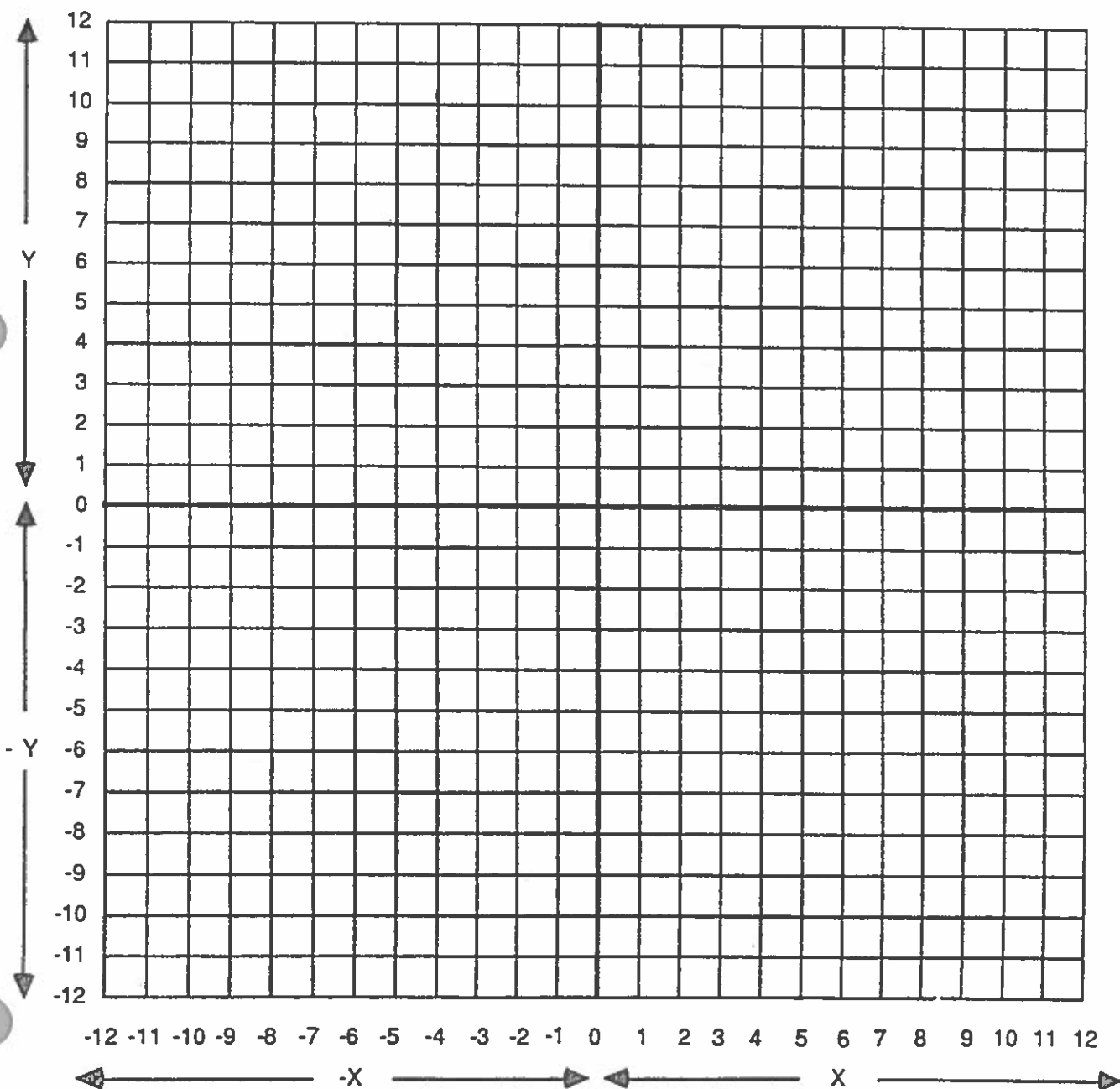


Locate the following points on the graph below and connect them in order with straight line segments. Do not connect points separated by the word "STOP."

$(X,Y) = (-2,11), (-2,2), (-11,2), (-11,-2), (-2,-2), (-2,-11), (2,-11), (2,-2), (11,-2), (11,2), (2,2), (2,11), (-2,11).$



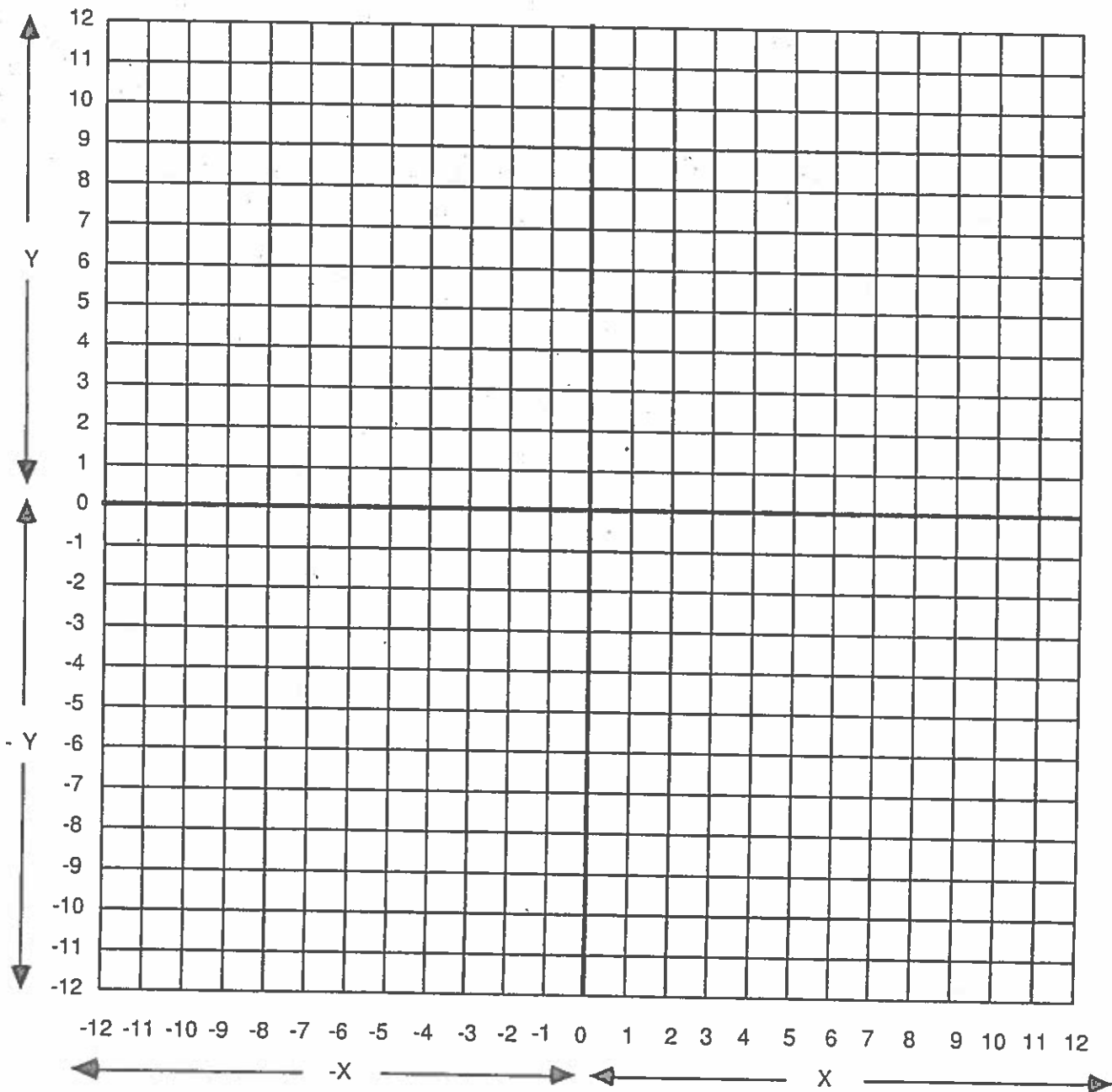
STAR
GRAPHITI

Student's Name _____ 2A

Class _____ Date _____

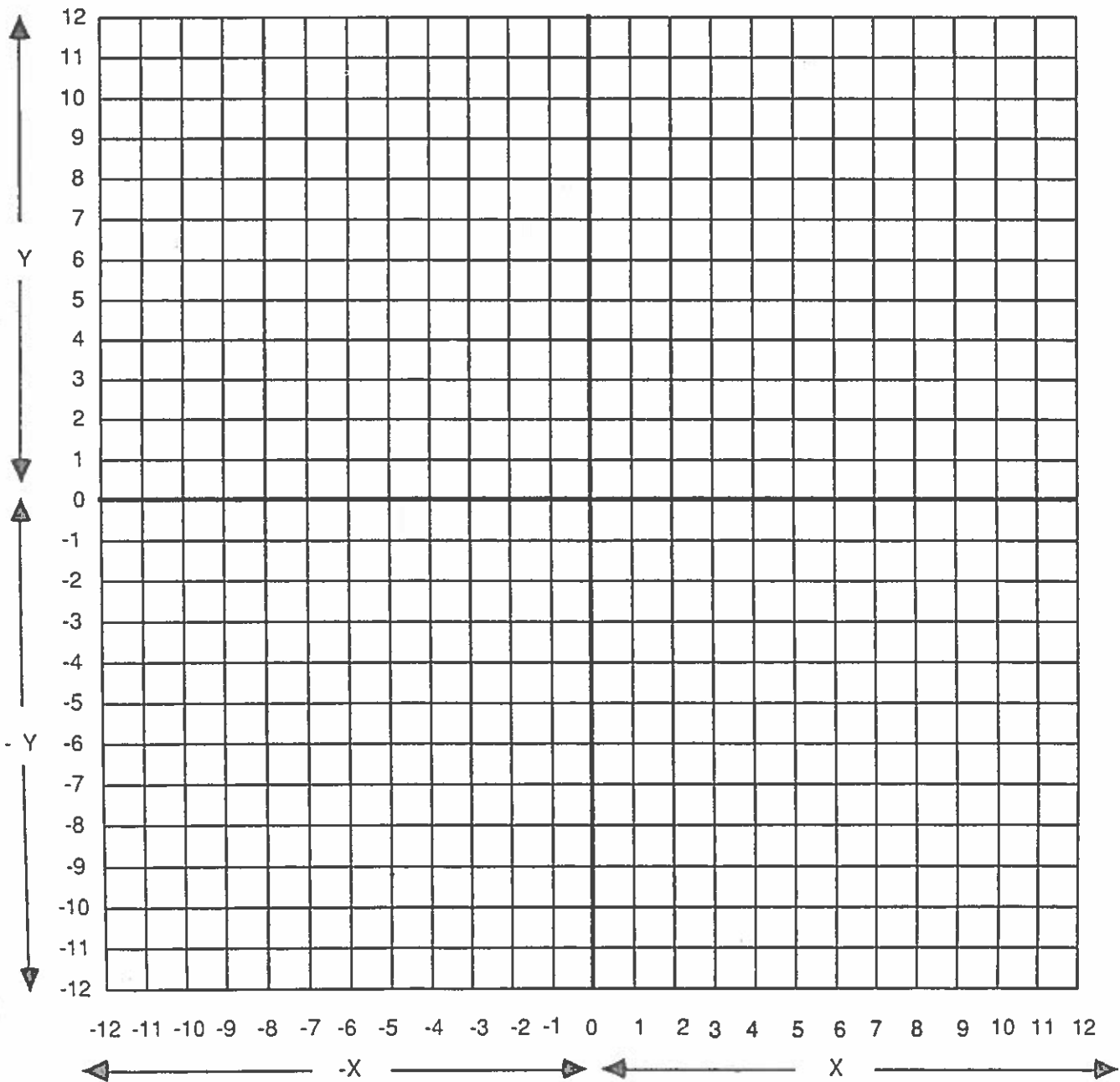
Locate the following points on the graph below and connect them in order with straight line segments. Do not connect points separated by the word "STOP."

$(X,Y) = (-9,-12), (-5,-3), (-11,3), (-3,3), (0,11), (3,3), (11,3), (5,-3), (9,-12), (0,-6), (-9,-12)$.



Locate the following points on the graph below and connect them in order with straight line segments. Do not connect points separated by the word "STOP."

(X,Y) = (5,1), (6,2), (7,1), (8,2), (9,1) STOP (7,-1), (8,0), (9,-1), (10,0), (11,-1) STOP (-9,9), (-10,7), (-8,3), (-8,1), (-9,-1), (-8,-3), (-6,-1), (-4,9), (3,11), (4,5), (-6,-1), (3,11) STOP (-4,9), (4,5) STOP (0,7), (1,3), (2,0), (4,-4), (8,-10), (10,-12) STOP (-12,-9), (-11,-11), (-10,-8), (-9,-11), (-8,-9), (-7,-11), (-6,-10), (-5,-11), (-4,-8), (-3,-11), (-2,-6), (-1,-11), (0,-9), (1,-11), (2,-10), (3,-11), (4,-7), (5,-11), (6,-8), (7,-11), (9,-8), (10,-11), (11,-7), (12,-11).





Student's Name _____

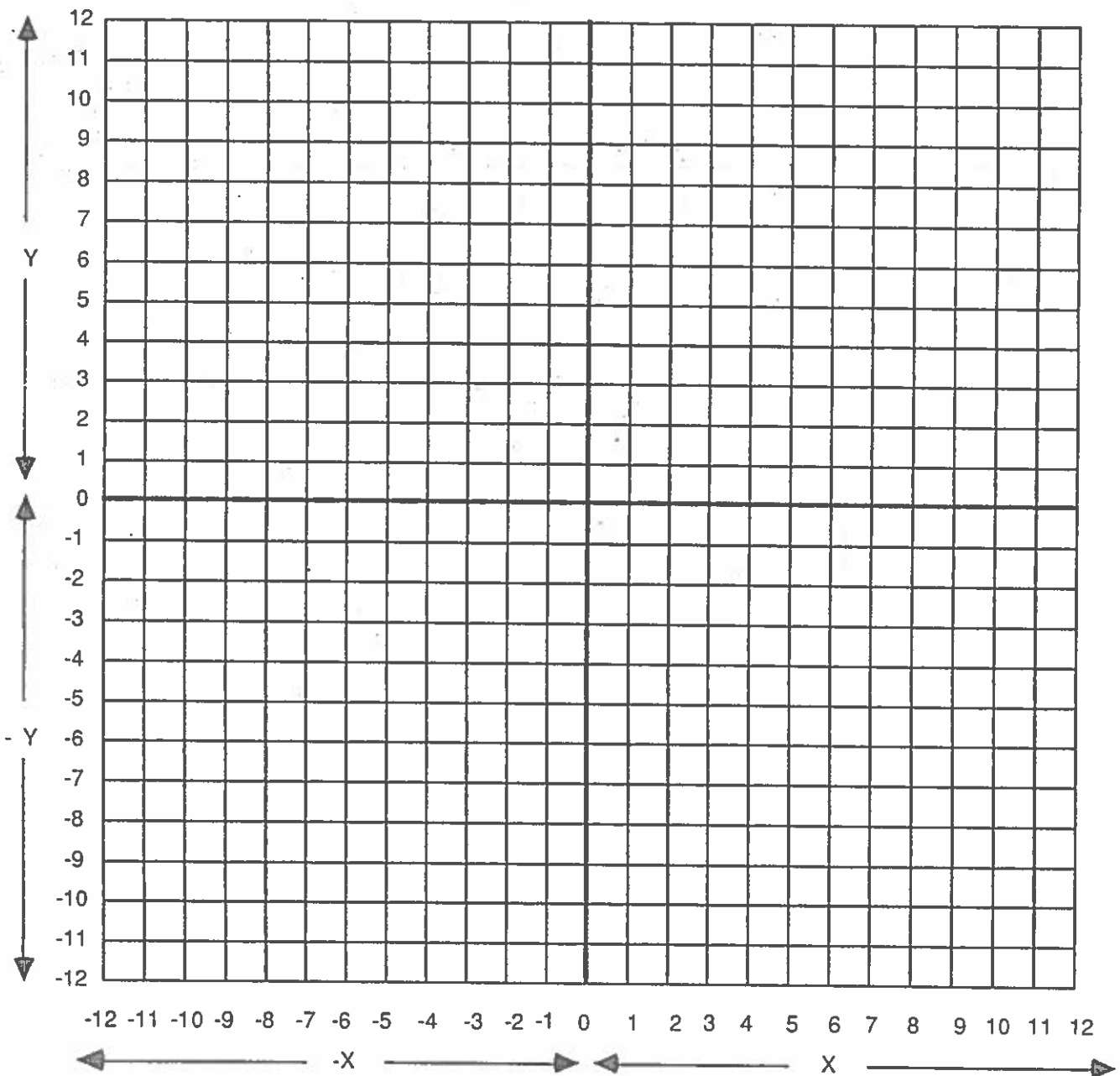
6A

Class _____

Date _____

Locate the following points on the graph below and connect them in order with straight line segments. Do not connect points separated by the word "STOP."

$(X,Y) = (7,-11), (-10,-7), (-10,5), (-6,7), (10,3), (7,1), (7,-11), (10,-8), (10,3)$ STOP $(-10,5), (7,1)$ STOP $(-8,-4), (-8,1), (-7,2), (2,0), (3,-1), (3,-6), (2,-7), (-7,-5), (-8,-4)$ STOP $(4,-1), (5,0), (6,-1), (5,-2), (4,-1)$ STOP $(4,-4), (5,-3), (6,-4), (5,-5), (4,-4)$ STOP $(4,-7), (5,-6), (6,-7), (5,-8), (4,-7)$ STOP $(2,12), (6,4), (10,12)$.





GRAPHITI

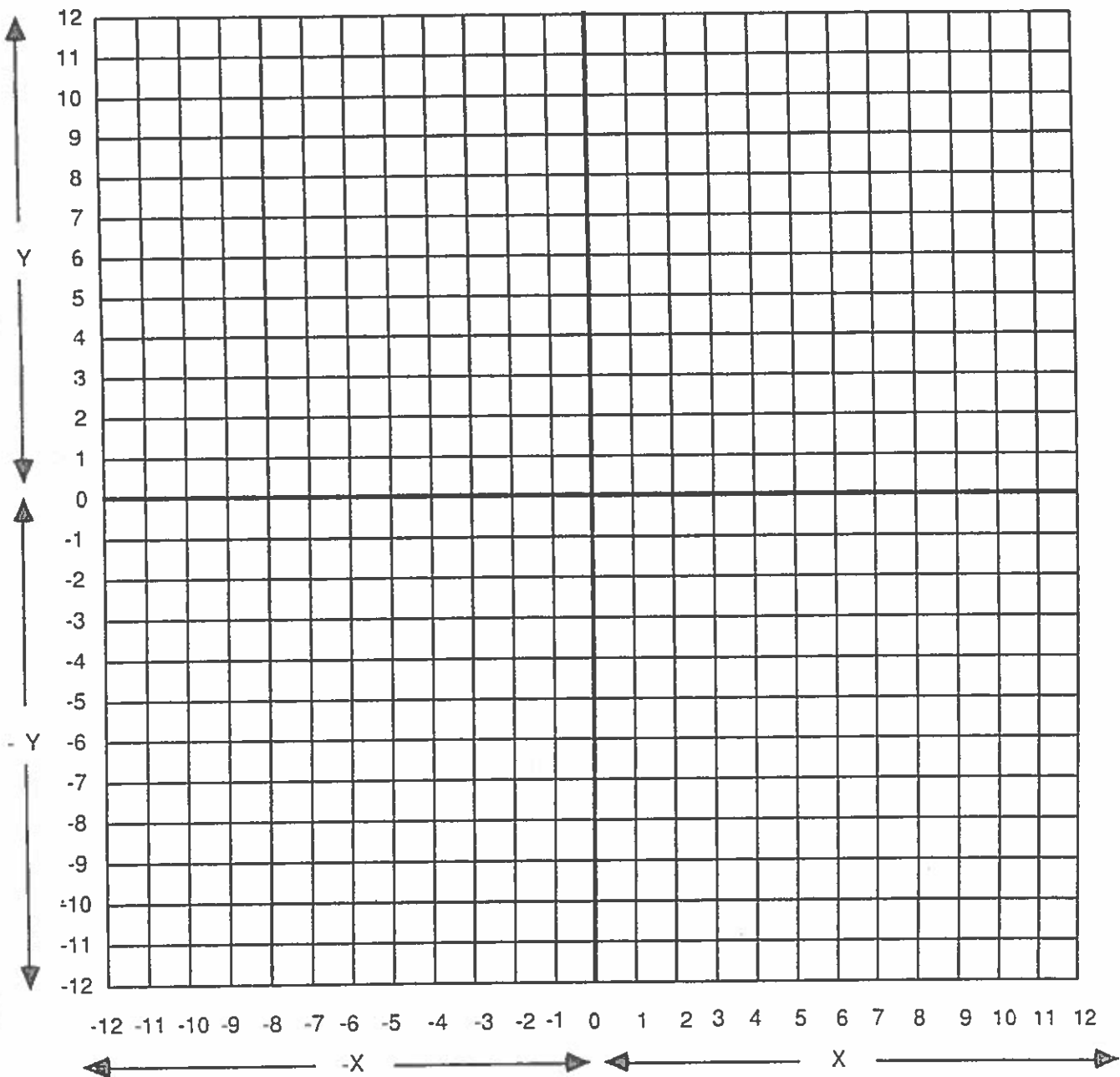
Student's Name _____

7A

Class _____ Date _____

Locate the following points on the graph below and connect them in order with straight line segments. Do not connect points separated by the word "STOP."

(X,Y) = (-12,6), (-11,6), (-10,7), (-10,8), (-9,9), (-9,10), (-8,11), (-6,11), (-5,10), (-4,10), (-3,11), (-1,12), (3,12), (4,11), (5,11), (6,10), (7,10), (8,11), (9,11), (10,10), (11,11), (12,11) STOP (-10,6), (-9,6), (-8,7), (-8,8), (-7,9), (-6,9), (-5,10) STOP (-9,4), (-8,5), (-7,5), (-7,6), (-6,7), (-4,7), (-3,6) STOP (2,8), (3,8), (4,9), (5,9), (6,10) STOP (7,6), (8,7), (9,6), (10,7), (11,6) STOP (5,4), (6,5), (7,4), (8,5), (9,4) STOP (-12,-9), (-8,-7), (-7,-9), (-3,-7), (-2,-9), (2,-7), (3,-9), (7,-7), (8,-9), (12,-7) STOP (-12,-6), (-5,-6) STOP (8,-6), (12,-6) STOP (-3,-7), (-5,-6), (-6,-5), (-1,8), (-2,-4), (-6,-5), (9,-5), (7,-7) STOP (-1,-5), (-1,11), (1,10), (-1,9) STOP (-1,8), (6,-3), (7,-5), (8,-3), (9,-2), (10,-4), (8,-3) STOP (-1,-4), (6,-3).



GRAPHITI

Student's Name _____

Class _____ Date _____

Locate the following points on the graph below and connect them in order with straight line segments. Do not connect points separated by the word "STOP."

- (X,Y) = (-10,12), (-10,10), (-11,9), (-11,8), (-10,4), (-10,3), (-9,1), (-9,0), (-8,-3), (-6,-4), (-4,-6), (-3.5,-8), (-2,-12)
STOP (-10,11), (-5,10), (-1,9), (3.5,8.5), (7,8), (7,6), (12,6) STOP (0,12), (-1,9) STOP (8,12), (7,8) STOP (2.5,0),
(12,-2) STOP (10,6), (8,-11) STOP (-3.5,-8), (0,-8), (6,-11), (12,-11) STOP (3.5,8.5), (2.5,0), (2,-2), (1,-2), (1,-5),
(0,-8) STOP (-5,10), (-6,5), (1,-4).

